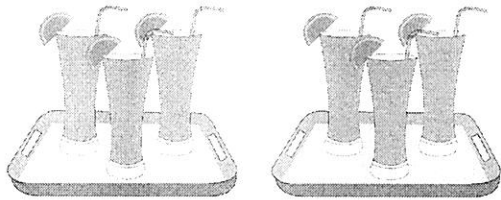


Adding Doubles

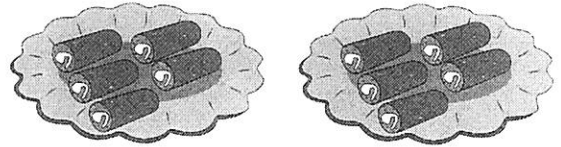
Count the objects and complete each doubles fact.

1)



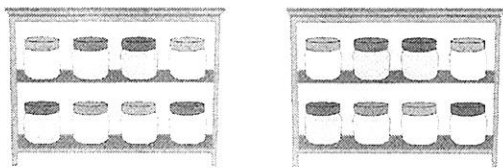
$3 + 3 = \underline{\quad}$

2)



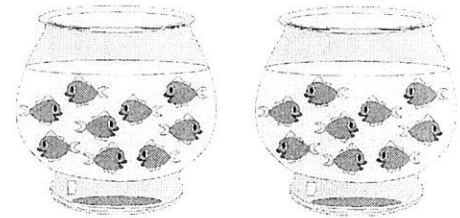
$5 + 5 = \underline{\quad}$

3)



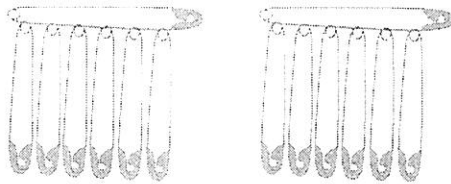
$8 + 8 = \underline{\quad}$

4)



$9 + 9 = \underline{\quad}$

5)




$7 + 7 = \underline{\quad}$

6)




$6 + 6 = \underline{\quad}$

7)



$2 + 2 = \underline{\quad}$

8)




$4 + 4 = \underline{\quad}$

Adding Doubles

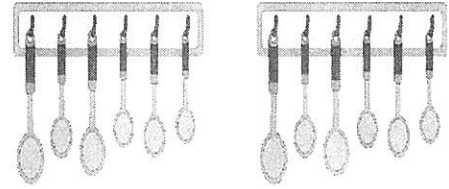
Count the objects and complete each doubles fact.

1)



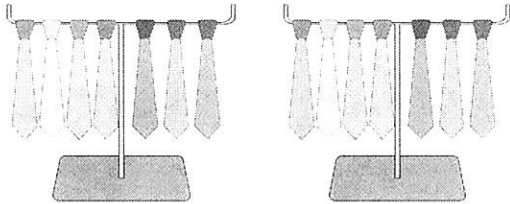
$$8 + 8 = \underline{\hspace{2cm}}$$

2)



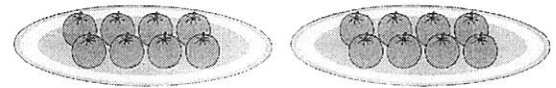
$$6 + 6 = \underline{\hspace{2cm}}$$

3)



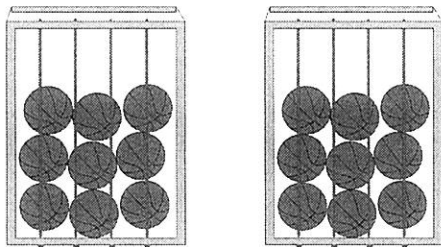
$$7 + 7 = \underline{\hspace{2cm}}$$

4)




$$8 + 8 = \underline{\hspace{2cm}}$$

5)




$$9 + 9 = \underline{\hspace{2cm}}$$

6)



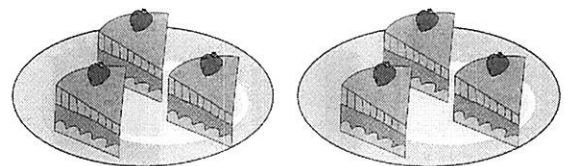
$$5 + 5 = \underline{\hspace{2cm}}$$

7)



$$4 + 4 = \underline{\hspace{2cm}}$$

8)




$$3 + 3 = \underline{\hspace{2cm}}$$

Name _____

Date _____

Circle the 5th apple.



Circle the 10th feather.



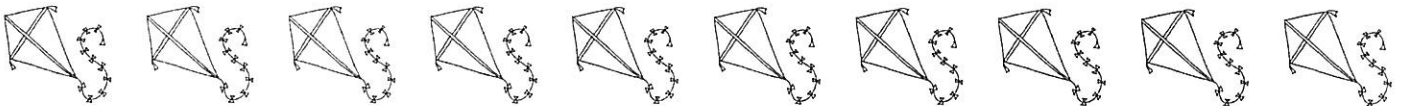
Circle the 4th grasshopper.



Circle the 8th puppy.



Circle the 7th kite.



Name : _____

Score : _____

Numbers 1 - 25


1	2	3	4	5
6	7	8	9	10
11	12	13	14	15
16	17	18	19	20
21	22	23	24	25

Name: _____

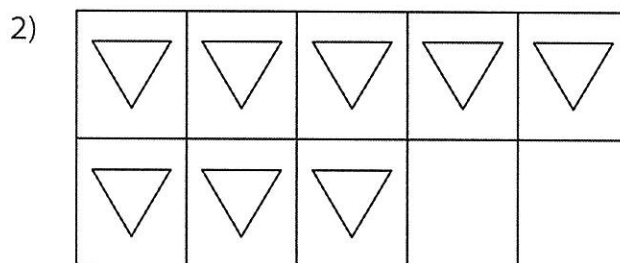
Making 10

Sheet 3

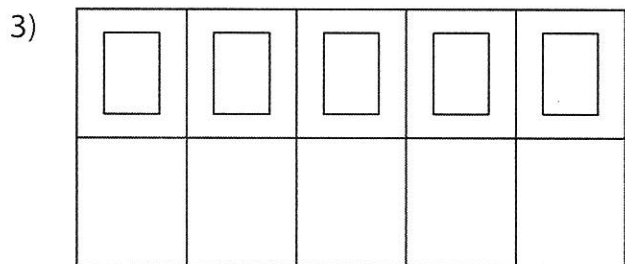
Draw more shapes to make 10 and complete the addition equation.



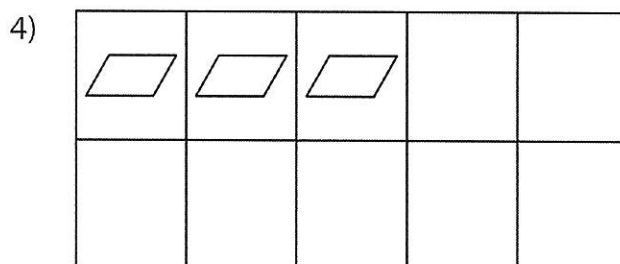
$$1 + \underline{\quad} = 10$$



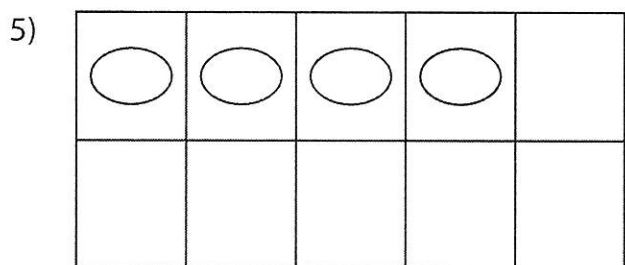
$$8 + \underline{\quad} = 10$$



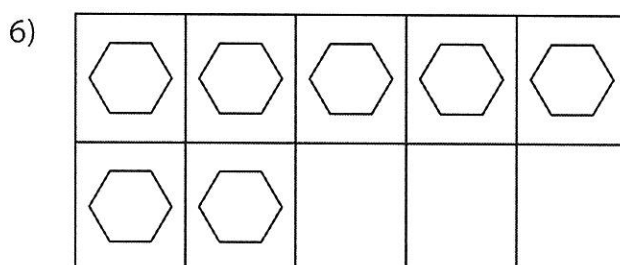
$$5 + \underline{\quad} = 10$$



$$3 + \underline{\quad} = 10$$




$$4 + \underline{\quad} = 10$$



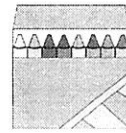
$$7 + \underline{\quad} = 10$$

Name : _____

Adding One



- 1) Bob has 7 crayons. His friend gives him 1 more crayon. How many crayons does Bob have now?




- 2) Sadie ate 5 muffins for breakfast. She still felt hungry, so she ate 1 more muffin. How many muffins did Sadie eat in all?



- 3) Dean has 3 marbles. His brother gives him 1 more marble. How many marbles does Dean have now?



- 4) Tom has 4 toy trains. Joe has 1 toy train. How many toy trains are there in total?



- 5) Ivy made 2 sandwiches for herself. She then made 1 sandwich for her brother. How many sandwiches did Ivy make in total?




Name: _____

Time in Words – Hours

Sheet 1

Write each time in words.


1)




2)




3)




4)



5)



6)



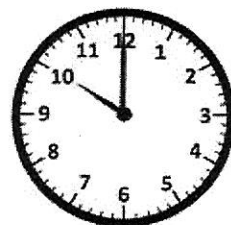
7)



8)



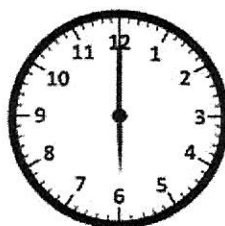
9)



10)



11)



12)




Name: _____

Time in Words – Hours

Sheet 2

Write each time in words.


1)



2)



3)




4)




5)



6)




7)




8)



9)




10)



11)



12)


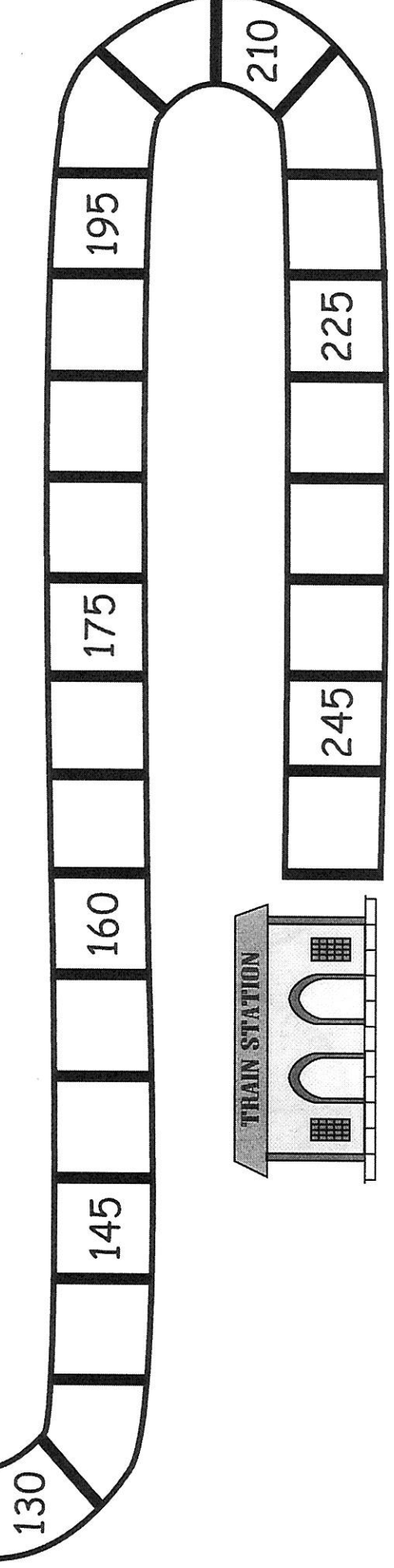
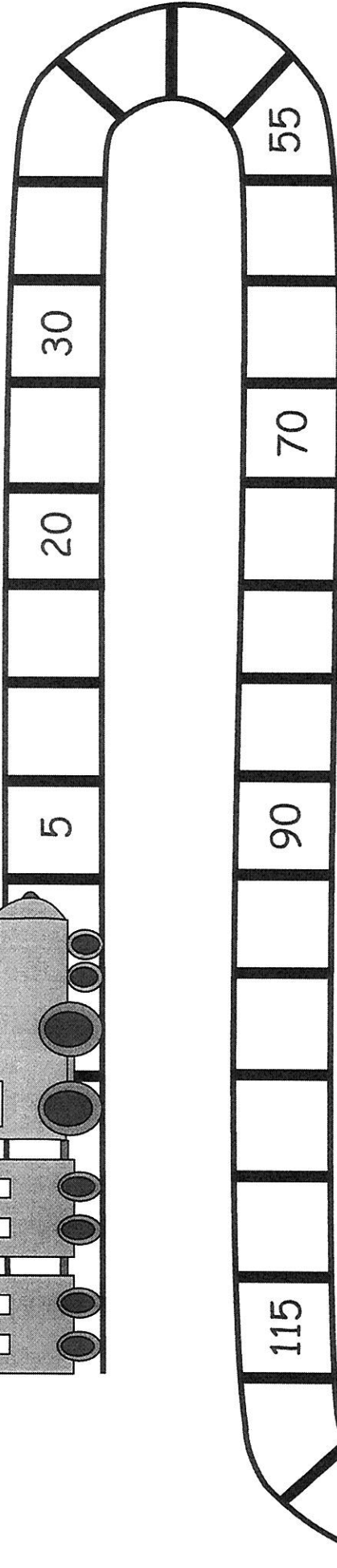
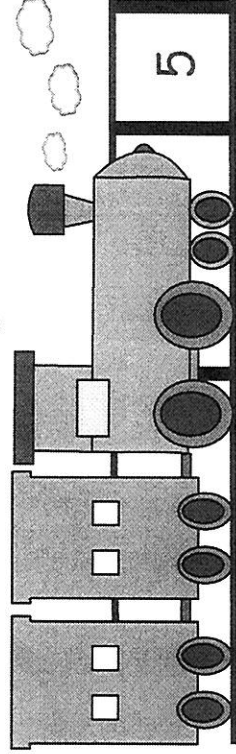


Name: _____

Score: _____

Skip Count by 5s

Count by 5s to fill in the missing numbers on the railroad track.



Name _____ Date _____

Match the clock to the time.



2:00



11:00



10:00



9:00



8:00




12:00



5:00



4:00



3:00



1:00